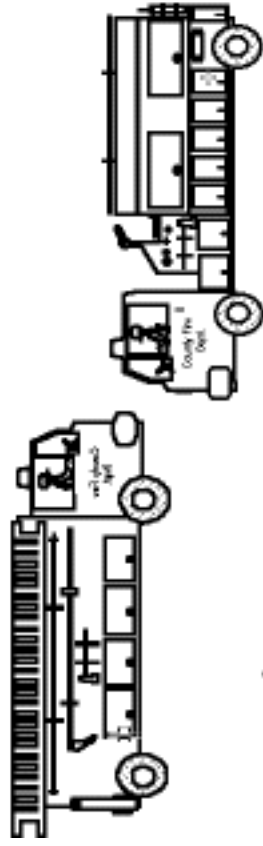
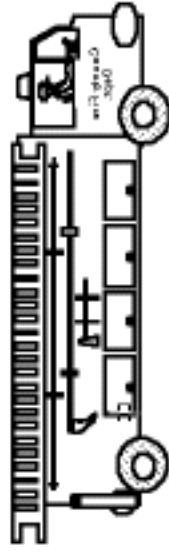


Firefighting Addition

The city had 2 fire trucks.



They got 1 new one.



How many fire trucks do they have now? _____

$$\underline{\quad} + \underline{\quad} = \underline{\quad}$$

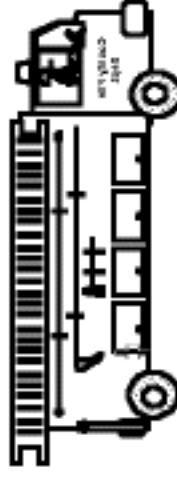
Write this problem as an equation.

$$1 + 2 = 3$$



Firefighting

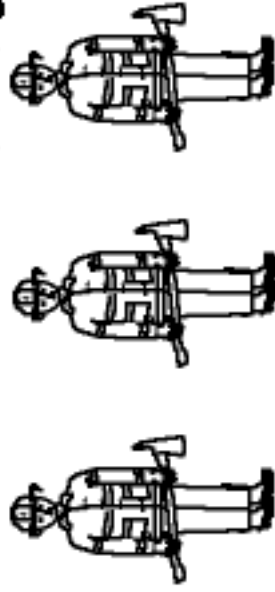
Addition



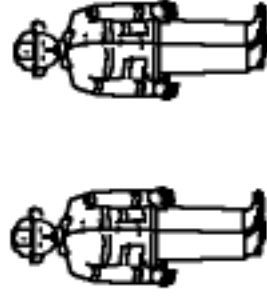
By _____

Firefighting Addition

The station had 3 firefighters.



They hired 2 new firefighters.



How many firefighters are
there now? _____

$$\underline{\quad} + \underline{\quad} = \underline{\quad}$$

Write this problem as an equation.

Firefighting Addition

The firefighters had 5 axes.



They bought 2 more.



How many axes do they have
now? _____

$$\underline{\quad} + \underline{\quad} = \underline{\quad}$$

Write this problem as an equation.

Firefighting Addition

The station had 4 helmets.



They got 4 new helmets.



How many are there now? _____

$$\underline{\quad} + \underline{\quad} = \underline{\quad}$$

Write this problem as an equation.

Firefighting Addition

The firefighters had 2 dogs.



They got 2 more.



How many dogs do they have

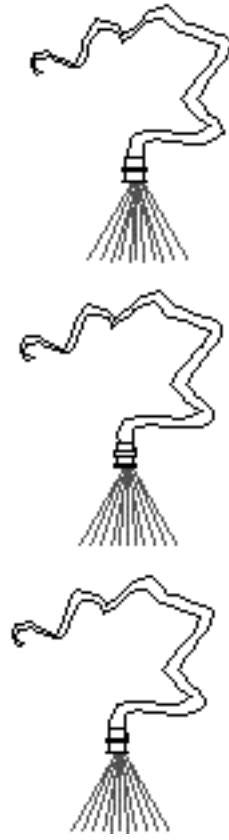
now? _____

$$\underline{\quad} + \underline{\quad} = \underline{\quad}$$

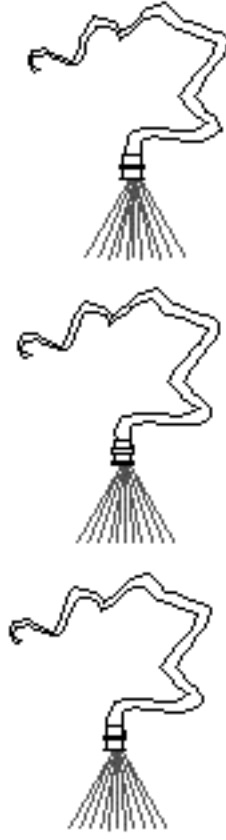
Write this problem as an equation.

Firefighting Addition

The station had 3 hoses.



They got 3 new hoses.



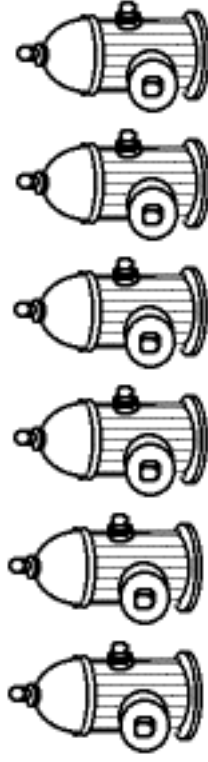
How many are there now? _____

$$\underline{\quad} + \underline{\quad} = \underline{\quad}$$

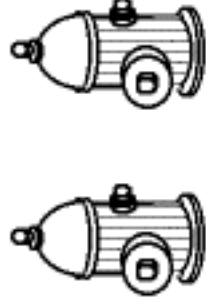
Write this problem as an equation.

Firefighting Addition

The city had 6 hydrants.



They got 2 more.



How many are there

now? _____

$$\underline{\quad} + \underline{\quad} = \underline{\quad}$$

Write this problem as an equation.

Firefighting Addition

The fire fighters had 10 boots.



They got 10 new ones.



How many are there now? _____

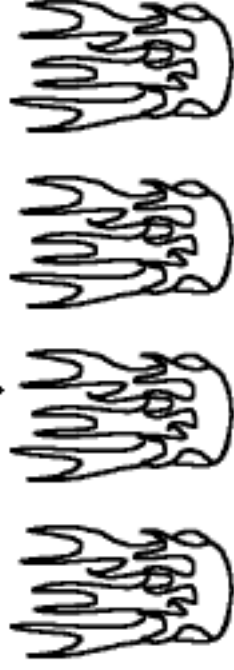
$$\underline{\quad} + \underline{\quad} = \underline{\quad}$$

Write this problem as an equation.

Firefighting Addition

The fire fighters put out 4

fires.



Then they put out 2 more.



How many fires have they put

out? _____

$$\underline{\quad} + \underline{\quad} = \underline{\quad}$$

Write this problem as an equation.