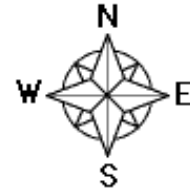


Name: _____

Global Treasure Hunt #1

Use a globe or detailed world map to follow the trail.

1. Find the longitude and latitude of where you are right now.



2. Travel south to 90°S . What continent are you on?

A ○ _____

3. Travel north along 75°W to the equator. What continent are you on?

_____ ○ _____

4. Travel east along the equator to 20°E . What continent are you on?

_____ ○ _____

5. Go north on 20°E to 52°N . What continent are you on?

_____ ○ _____

6. Travel west along 52°N to 60°W . What continent are you on?

○ _____

7. Go north along 60°W to 90°N , then (still traveling in a straight line) travel south along 120°E to 50°N . What continent are you on?

_____ ○ _____


8. Continue traveling south for another 80° . What continent are you on?

_____ ○ _____

9. You have just traveled to each of the seven _____ on earth.

_____ ○ ○

©EnchantedLearning.com



Write the circled letters: _____

Unscramble the letters to find the geography word: _____

Global Treasure Hunt #1

Use a globe or detailed world map to follow the trail.

Answers

1. Find the longitude and latitude of where you are right now.

2. Travel south to 90°S . What continent are you on?

A (n) t a r c t i c a

3. Travel north along 75°W to the equator. What continent are you on?

S o (u) t h A m (e) r i c a

4. Travel east along the equator to 20°E . What continent are you on?

A f r i (c) a

5. Go north on 20°E to 52°N . What continent are you on?

E u r (o) p e

6. Travel west along 52°N to 60°W . What continent are you on?

(N) o r t h A m e r i c a

7. Go north along 60°W to 90°N , then (still traveling in a straight line) travel south along 120°E to 50°N . What continent are you on?

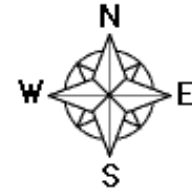
A s (i) a


8. Continue traveling south for another 80° . What continent are you on?

A u s (t) r a l i a

9. You have just traveled to each of the seven _____ on earth.

c o n t i n e (n) t (s)





Write the circled letters: n t e c o n i t n s

Unscramble the letters to find the geography word: c o n t i n e n t s